



ADVANCED GCE

PHYSICS A

Fields, Particles and Frontiers of Physics

G485



Candidates answer on the question paper.

OCR Supplied Materials:

- Data, Formulae and Relationships Booklet

Other Materials Required:

- Electronic calculator
- Ruler
- Protractor

**Tuesday 21 June 2011
Morning**

Duration: 1 hour 45 minutes



Candidate forename		Candidate surname	
-----------------------	--	----------------------	--

Centre number						Candidate number				
---------------	--	--	--	--	--	------------------	--	--	--	--

INSTRUCTIONS TO CANDIDATES

- Write your name, centre number and candidate number in the boxes above. Please write clearly and in capital letters.
- Use black ink. Pencil may be used for graphs and diagrams only.
- Read each question carefully and make sure that you know what you have to do before starting your answer.
- Answer **all** the questions.
- Do **not** write in the bar codes.
- Write your answer to each question in the space provided. Additional paper may be used if necessary but you must clearly show your candidate number, centre number and question number(s).

INFORMATION FOR CANDIDATES

- The number of marks is given in brackets [] at the end of each question or part question.
- The total number of marks for this paper is **100**.
- Where you see this icon you will be awarded marks for the quality of written communication in your answer.

This means for example you should:

 - ensure that text is legible and that spelling, punctuation and grammar are accurate so that meaning is clear
 - organise information clearly and coherently, using specialist vocabulary when appropriate.
- You may use an electronic calculator.
- This document consists of **20** pages. Any blank pages are indicated.

Answer **all** the questions.

1 (a) Define *electromotive force*.

.....
..... [1]

(b) Define *magnetic flux*.

.....
.....
..... [1]

(c) Fig. 1.1 shows a simple transformer.

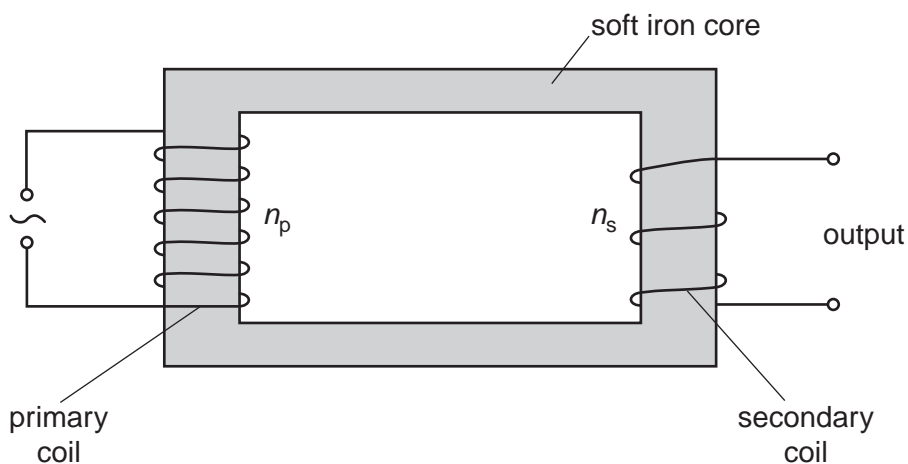


Fig. 1.1

(i) The primary coil is connected to an alternating voltage supply. Explain how an e.m.f. is induced in the secondary coil.

.....
.....
.....
.....
.....
.....
..... [3]

3

- (ii) State how you could change the transformer to increase the maximum e.m.f. induced in the secondary coil.

.....

.....

..... [1]

- (d) A transformer with 4200 turns in the primary coil is connected to a 230V mains supply. The e.m.f. across the output is 12V. Assume the transformer is 100% efficient.

- (i) Calculate the number of turns in the secondary coil.

number of turns = [2]

- (ii) The transformer output terminals are connected to a lamp using leads that have a total resistance of $0.35\ \Omega$. The p.d. across the lamp is 11.8V. Calculate

1 the current in the leads connected to the lamp

current = A [2]

2 the power dissipated in the leads.

power = W [2]

[Total: 12]

2 (a) Define *capacitance*.

.....
 [1]

(b) Fig. 2.1 shows two capacitors of capacitance $150\mu\text{F}$ and $450\mu\text{F}$ connected in series with a battery of e.m.f. 6.0V . The battery has negligible internal resistance.

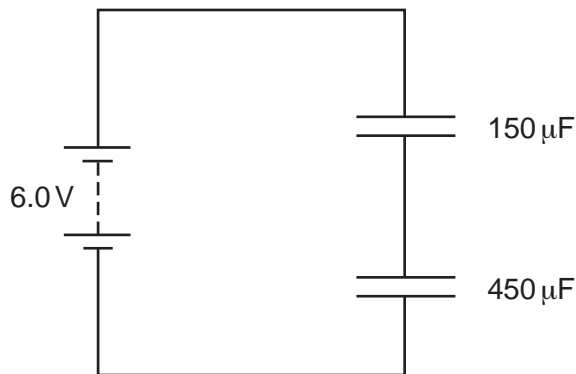


Fig. 2.1

For the circuit shown in Fig. 2.1, calculate

(i) the potential difference across the $150\mu\text{F}$ capacitor

potential difference = V [2]

(ii) the charge stored by the $150\mu\text{F}$ capacitor

charge = C [1]

(iii) the total capacitance of the circuit.

capacitance = F [1]

5

- (c) The fully charged capacitors shown in (b) are disconnected from the battery. The capacitors are then connected in series with a resistor R of resistance $45\text{ k}\Omega$ and an open switch S as shown in Fig. 2.2.

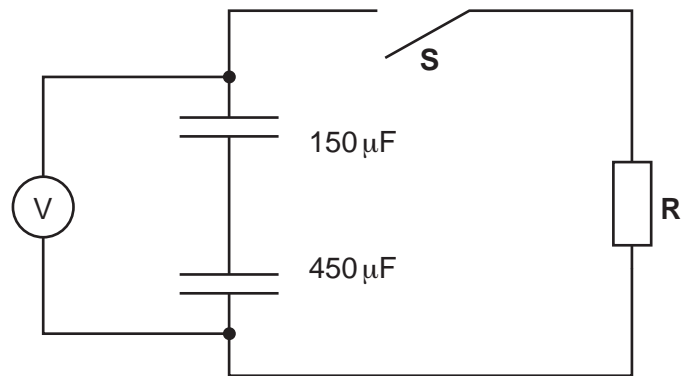


Fig. 2.2

The p.d. V across the capacitors is measured with a voltmeter of infinite resistance. The switch S is closed at time $t = 0$ and measurements of V are made at regular time intervals.

- (i) Show that the time constant for the circuit is about 5 s.

[1]

- (ii) On Fig. 2.3 sketch the variation of p.d. V with time t .

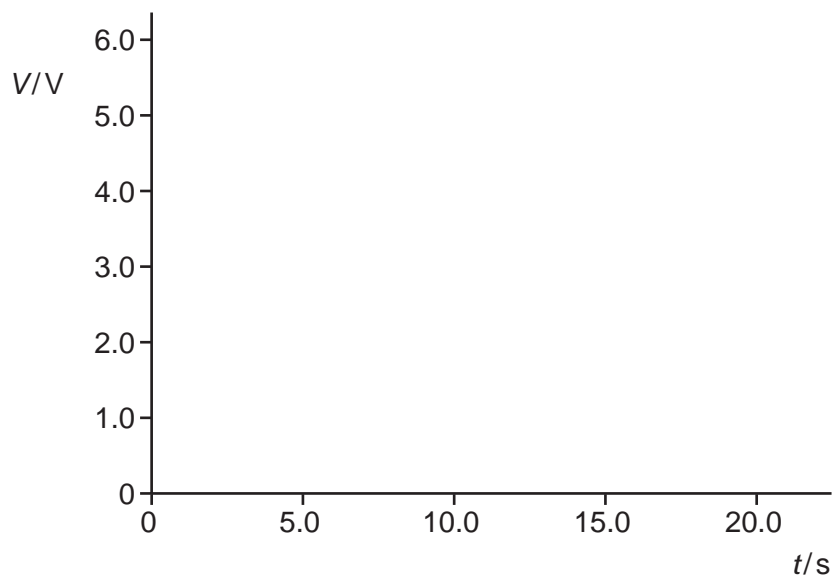


Fig. 2.3

[3]

6

(iii) At time $t = 0$ calculate the ratio

$$\frac{\text{energy stored by the } 150\ \mu\text{F capacitor}}{\text{energy stored by the } 450\ \mu\text{F capacitor}}$$

ratio = [2]

(iv) State and explain how the ratio varies with time.

.....

 [2]

[Total: 13]

3 (a) Define *electric field strength*.

.....
 [1]

(b) Fig. 3.1 shows two horizontal, parallel metal plates **A** and **B**.

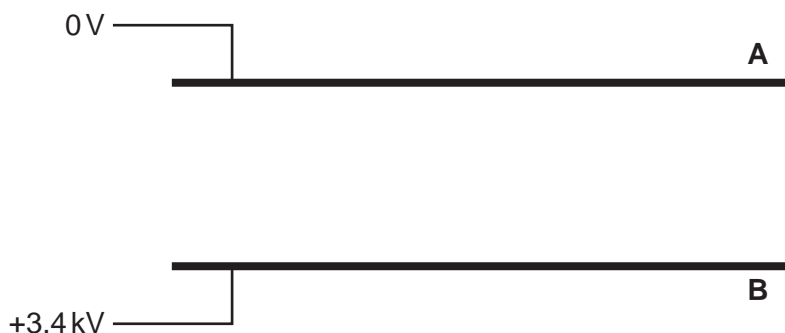


Fig. 3.1

The potential difference across the plates is 3.4 kV and the arrangement provides a uniform electric field between the plates.

On Fig. 3.1 draw at least six lines to represent the electric field between the plates. [2]

(c) A beam of electrons enters between the plates at right angles to the electric field. The horizontal velocity of the electrons is $4.0 \times 10^7 \text{ ms}^{-1}$. The path of the electrons is shown on Fig. 3.2. The horizontal length of each plate is 0.080 m and the separation of the plates is 0.050 cm. **P** is a point 0.040 m from where the beam enters the plates.

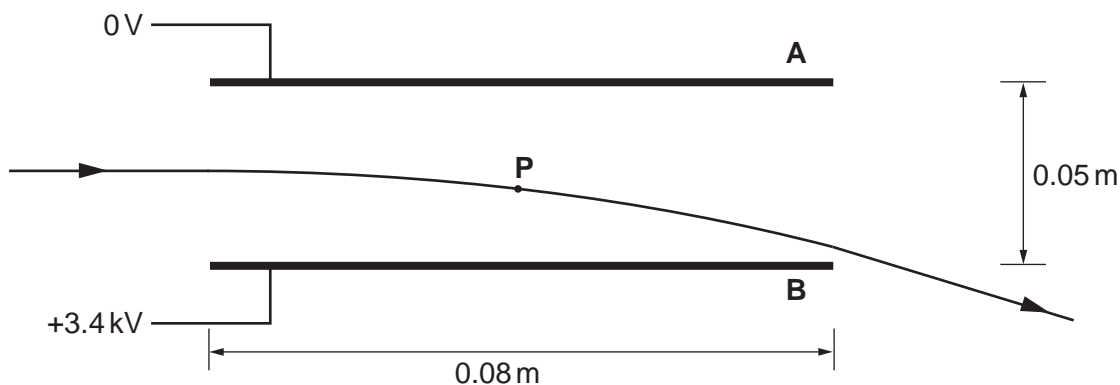


Fig. 3.2

(i) Draw an arrow on Fig. 3.2 to show the direction of the acceleration of an electron at **P**. [1]

(ii) Show that the acceleration of an electron between the plates is about $1 \times 10^{16} \text{ m s}^{-2}$.

[2]

(iii) Calculate the time taken for an electron on entering the plates to reach **P**.

time = s [1]

(iv) Show that the vertical velocity of the electron at **P** is $1.2 \times 10^7 \text{ m s}^{-1}$.

[1]

(v) Calculate the magnitude of the resultant velocity of the electron at **P**.

magnitude of the velocity = m s^{-1} [2]

(vi) Calculate the kinetic energy of the electron at **P**.

kinetic energy = J [2]

(vii) On Fig. 3.3 sketch the variation of kinetic energy E_k of the electron with the horizontal distance x it travels through the electric field and beyond. No calculations are required.

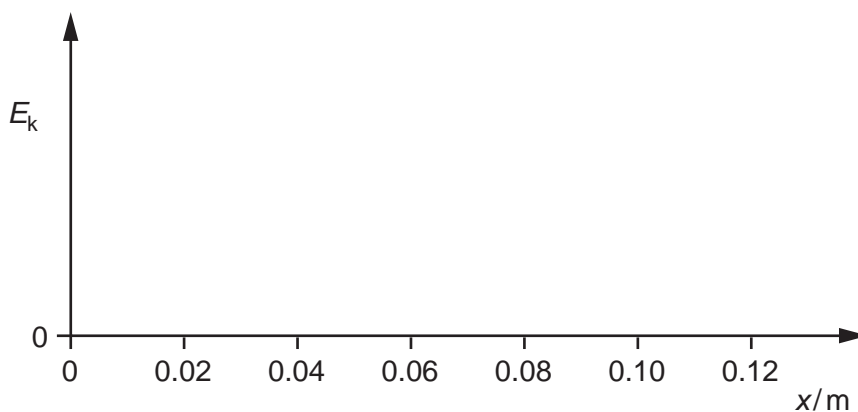


Fig. 3.3

[3]

[Total: 15]

Turn over

10

- 4 A small, charged metal sphere **A** is hung from an insulating string. The charge on **A** is +5.0 nC. Fig. 4.1 shows the effect on **A** when a charged sphere **B** on an insulated rod is positioned close to it. The string makes an angle θ with the vertical.

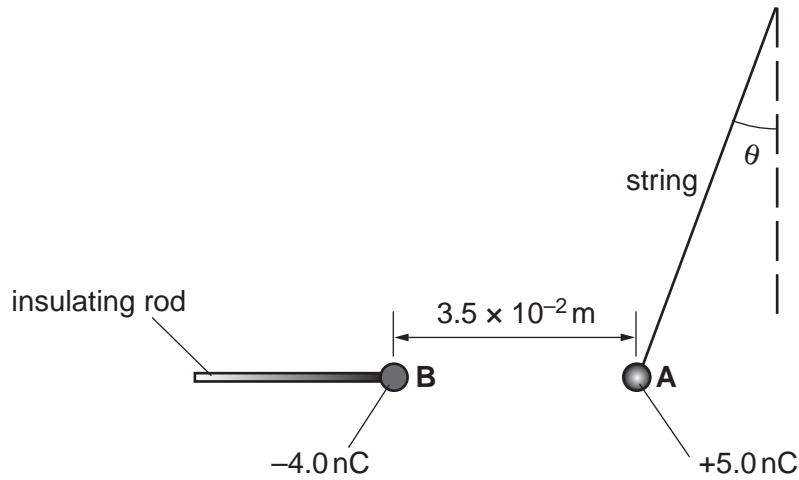


Fig. 4.1

The charge on **B** is -4.0 nC . The separation between the centres of the two spheres is $3.5 \times 10^{-2} \text{ m}$.

- (a) Determine the magnitude and direction of the electric field strength at the **midpoint** between the two charged spheres.

electric field strength = NC^{-1}

direction =

[4]

- (b) Show that the electric force on **A** is $1.5 \times 10^{-4} \text{ N}$.

[2]

11

- (c) The mass of sphere **A** is 4.5×10^{-5} kg. Use the method of resolving vectors or a vector triangle to determine the angle θ made by the string with the vertical.

$\theta = \dots\dots\dots^\circ$ [3]

[Total: 9]

- 5 Fig. 5.1 shows a rigid, straight metal rod **XY** placed perpendicular to a magnetic field. The magnetic field is produced by two magnets that are placed on a U-shaped steel core. The steel core sits on a digital balance.

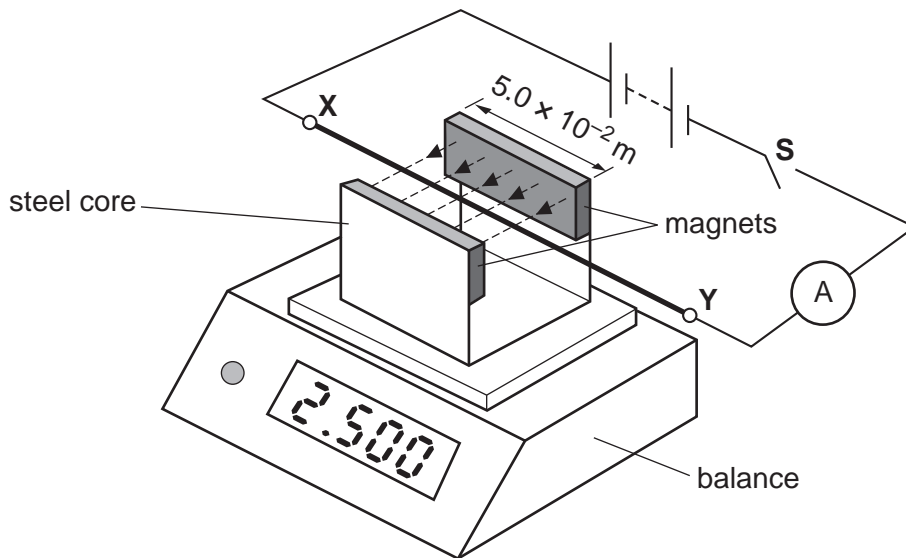


Fig. 5.1

The weight of the steel core and the magnets is 2.500 N. The rod is clamped at points **X** and **Y**. The rod is connected to a battery, switch and ammeter as shown in Fig. 5.1. The direction of the magnetic field is perpendicular to the rod.

Switch **S** is closed.

- (a) State the direction of the force that now acts on the rod due to the magnetic field.
 [1]
- (b) State how you determined the direction of the force.

 [1]
- (c) The length of the rod in the magnetic field is $5.0 \times 10^{-2} \text{ m}$ and the current in the rod is 4.0 A. Assume that the magnets provide a uniform magnetic field of magnetic flux density 0.080 T.
- (i) Calculate the force acting on the rod due to the magnetic field.

force = N [1]

13

(ii) State and explain the new reading on the balance.

reading on balance = N

.....
.....
.....
.....
..... [3]

(d) The rod is replaced by another rod of the same material having half the diameter of the first wire and the same length. The potential difference across this rod is the same. Calculate the force on this rod due to the magnetic field.

force = N [3]

[Total: 9]

15

(c) The radius of a ${}_{92}^{235}\text{U}$ nucleus is $8.8 \times 10^{-15}\text{m}$. The average mass of a nucleon is $1.7 \times 10^{-27}\text{kg}$.

(i) Estimate the average density of this nucleus.

density = kgm^{-3} [3]

(ii) State one assumption made in your calculation.

.....
 [1]

[Total: 14]

16

7 (a) Explain what is meant by the *critical density* of the universe.

.....
 [1]

(b) Cosmologists have determined the Hubble constant to be $65 \text{ km s}^{-1} \text{ Mpc}^{-1}$. Calculate the Hubble constant in s^{-1} and hence determine the critical density of the universe.

$1 \text{ pc} = 3.1 \times 10^{16} \text{ m}$

Hubble constant = s^{-1}

critical density = kg m^{-3} [3]

- (c) (i) Explain the terms *open*, *closed* and *flat* when describing the possible evolution of the universe. On Fig. 7.1 sketch and label graphs to illustrate your answer.



Fig. 7.1

open

.....

.....

closed

.....

.....

flat

.....

..... [3]

(ii) Suggest a reason why it is difficult to predict the future of the universe.

.....

.....

..... [1]

[Total: 8]

18

8 (a) State one reason for using non-invasive techniques in medical diagnosis.

.....
..... [1]

(b) Describe the use of medical tracers to diagnose the condition of organs.

.....
.....
.....
..... [2]

(c) Describe the principles of positron emission tomography (PET).

.....
.....
.....
.....
.....
.....
.....
.....
.....
.....
.....
.....
.....
.....
.....
.....
.....
.....
..... [5]

[Total: 8]

10 (a) Describe the process of induced nuclear fission.

.....

.....

.....

.....

..... [2]

(b) Explain how nuclear fission can provide energy.

.....

.....

.....

.....

..... [2]

(c) Suggest a suitable material which can be used as a moderator in a fission reactor and explain its role.

.....

.....

.....

.....

..... [3]

[Total: 7]

END OF QUESTION PAPER



Copyright Information

OCR is committed to seeking permission to reproduce all third-party content that it uses in its assessment materials. OCR has attempted to identify and contact all copyright holders whose work is used in this paper. To avoid the issue of disclosure of answer-related information to candidates, all copyright acknowledgements are reproduced in the OCR Copyright Acknowledgements Booklet. This is produced for each series of examinations and is freely available to download from our public website (www.ocr.org.uk) after the live examination series.

If OCR has unwittingly failed to correctly acknowledge or clear any third-party content in this assessment material, OCR will be happy to correct its mistake at the earliest possible opportunity.

For queries or further information please contact the Copyright Team, First Floor, 9 Hills Road, Cambridge CB2 1GE.

OCR is part of the Cambridge Assessment Group; Cambridge Assessment is the brand name of University of Cambridge Local Examinations Syndicate (UCLES), which is itself a department of the University of Cambridge.