



Answer **all** the questions.

1 (a) Define *capacitance*.

.....  
 ..... [1]

(b) Fig. 1.1 shows a circuit consisting of a resistor and a capacitor of capacitance  $4.5 \mu\text{F}$ .

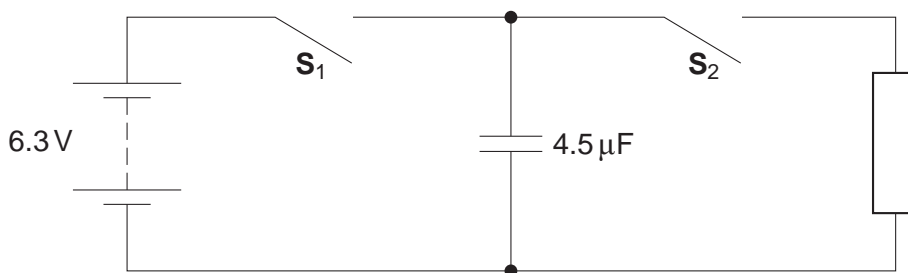


Fig. 1.1

Switch  $S_1$  is closed and switch  $S_2$  is left open. The potential difference across the capacitor is 6.3V.

Calculate

(i) the charge stored by the capacitor

charge = .....  $\mu\text{C}$  [1]

(ii) the energy stored by the capacitor.

energy = ..... J [2]

3

(c) Switch  $S_1$  is opened and switch  $S_2$  is closed.

(i) Describe and explain in terms of the movement of electrons how the potential difference across the capacitor changes.

.....  
 .....  
 .....  
 ..... [3]

(ii) The energy stored in the capacitor decreases to zero. State where the initial energy stored in the capacitor is dissipated.

.....  
 ..... [1]

(d) Fig.1.2 shows the  $4.5\mu\text{F}$  capacitor now connected in parallel with a capacitor of capacitance  $1.5\mu\text{F}$ . Both switches are open and both capacitors are uncharged.

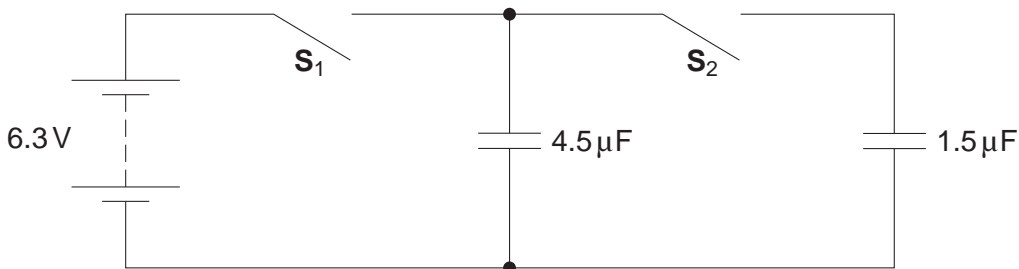


Fig. 1.2

Switch  $S_1$  is closed. The potential difference across the  $4.5\mu\text{F}$  capacitor is now 6.3V. Switch  $S_1$  is opened and then switch  $S_2$  is closed.

(i) Calculate the total capacitance of the circuit when  $S_2$  is closed.

capacitance = .....  $\mu\text{F}$  [1]

(ii) Calculate the final potential difference across the capacitors.

potential difference = ..... V [2]

[Total: 11]

Turn over

4

- 2 (a) Olbers' paradox is based on two assumptions about the nature of our Universe. State these two assumptions.

.....  
.....  
..... [2]

- (b) Fig. 2.1 shows how the recessional speed  $v$  of galaxies varies with their distance  $d$  from the Earth.

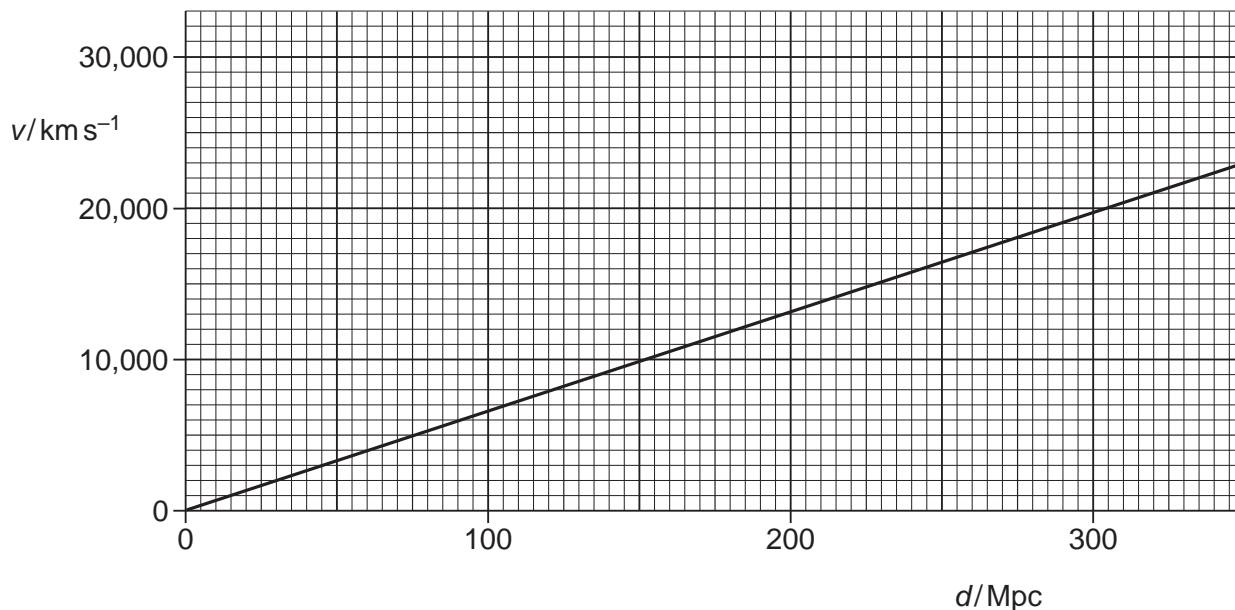


Fig. 2.1

- (i) Use Fig. 2.1 to determine the Hubble constant.

Hubble constant = .....  $\text{km s}^{-1} \text{Mpc}^{-1}$  [2]

5

(ii) Hence estimate the age of the Universe in years.

1 year =  $3.2 \times 10^7$  s and 1 pc =  $3.1 \times 10^{16}$  m

age = ..... y [3]

(c) (i) Calculate the critical density of the Universe using the Hubble constant determined in (b)(i).

critical density = .....  $\text{kg m}^{-3}$  [2]

(ii) Describe how the fate of the Universe depends on its average density.

.....  
.....  
.....  
.....  
.....  
..... [3]

(d) Describe the evidence for the hot big bang model of the Universe.

.....  
.....  
.....  
.....  
.....  
..... [4]

[Total: 16]

Turn over

3 (a) Fig. 3.1 shows two charged horizontal plates.



Fig. 3.1

The potential difference across the plates is 60V. The separation of the plates is 5.0 mm.

- (i) On Fig. 3.1 draw the electric field pattern between the plates. [2]
- (ii) Calculate the electric field strength between the plates.

electric field strength = .....V m<sup>-1</sup> [1]

(b) Positive ions are accelerated from rest in the horizontal direction through a potential difference of 400V. The charged plates in (a) are then used to deflect the ions in the vertical direction. Fig. 3.2 shows the path of these ions.

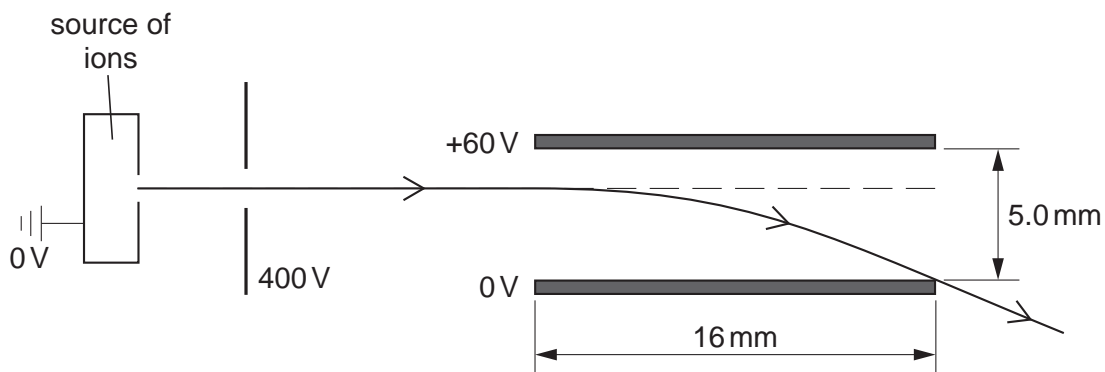


Fig. 3.2

7

Each ion has a mass of  $6.6 \times 10^{-27}$  kg and a charge of  $3.2 \times 10^{-19}$  C.

- (i) Show that the horizontal velocity of an ion after the acceleration by the 400V potential difference is  $2.0 \times 10^5$  ms<sup>-1</sup>.

[2]

- (ii) The ions enter at right angles to the uniform electric field between the plates. Calculate the vertical acceleration of an ion due to this electric field.

acceleration = ..... ms<sup>-2</sup> [2]

- (iii) The length of each of the charged plates is 16 mm.

- 1 Show that an ion takes about  $8.0 \times 10^{-8}$  s to travel through the plates.

[1]

- 2 Calculate the vertical deflection of an ion as it travels through the plates.

deflection = ..... m [2]

8

- (c) A uniform magnetic field is applied in the region between the plates in Fig. 3.2. The magnetic field is perpendicular to both the path of the ions and the electric field between the plates.

Calculate the magnitude of the magnetic flux density of field needed to make the ions travel horizontally through the plates.

magnetic flux density = ..... T [3]

- (d) Ions of the same charge but greater mass are accelerated by the potential difference of 400V described in (b). Describe and explain the effect on the deflection of the ions after they have travelled between the plates using the same electric and magnetic fields of (c).

.....

.....

.....

..... [2]

[Total: 15]

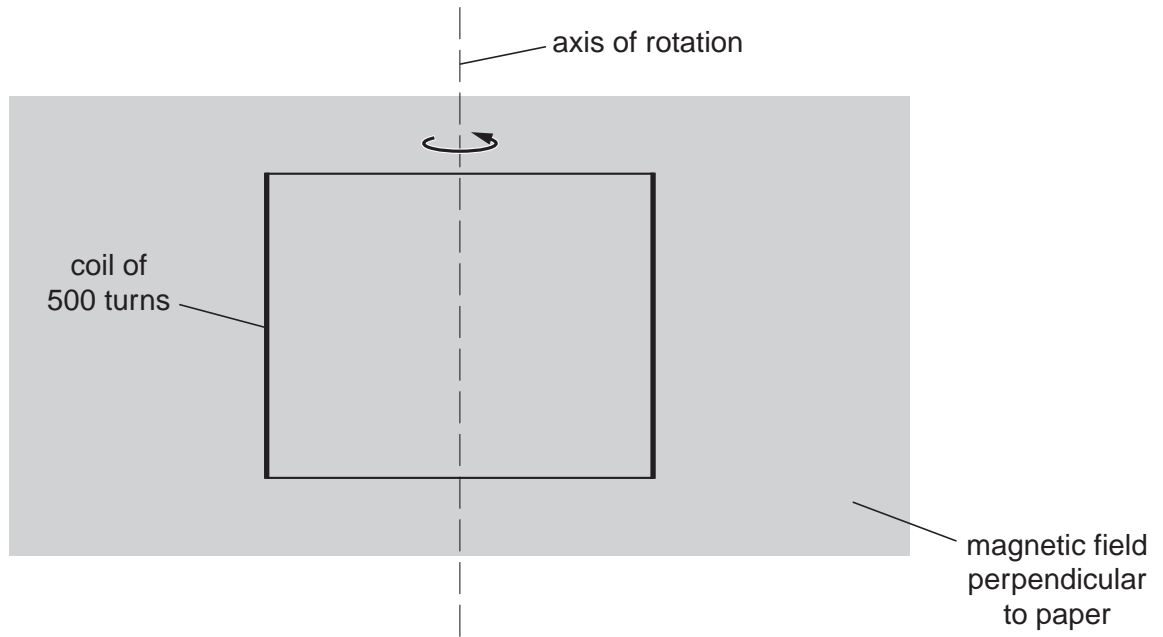


4 (a) Define *magnetic flux*.

.....

..... [1]

(b) Fig. 4.1 shows a generator coil of 500 turns and cross-sectional area  $2.5 \times 10^{-3} \text{ m}^2$  placed in a magnetic field of magnetic flux density 0.035T. The plane of the coil is perpendicular to the magnetic field.



**Fig. 4.1**

Calculate the magnetic flux linkage for the coil in this position. Give a unit for your answer.

magnetic flux linkage = ..... unit ..... [3]

10

(c) The coil is rotated about the axis in the direction shown in Fig. 4.1.

Fig. 4.2 shows the variation of the magnetic flux  $\phi$  against time  $t$  as the coil is rotated.

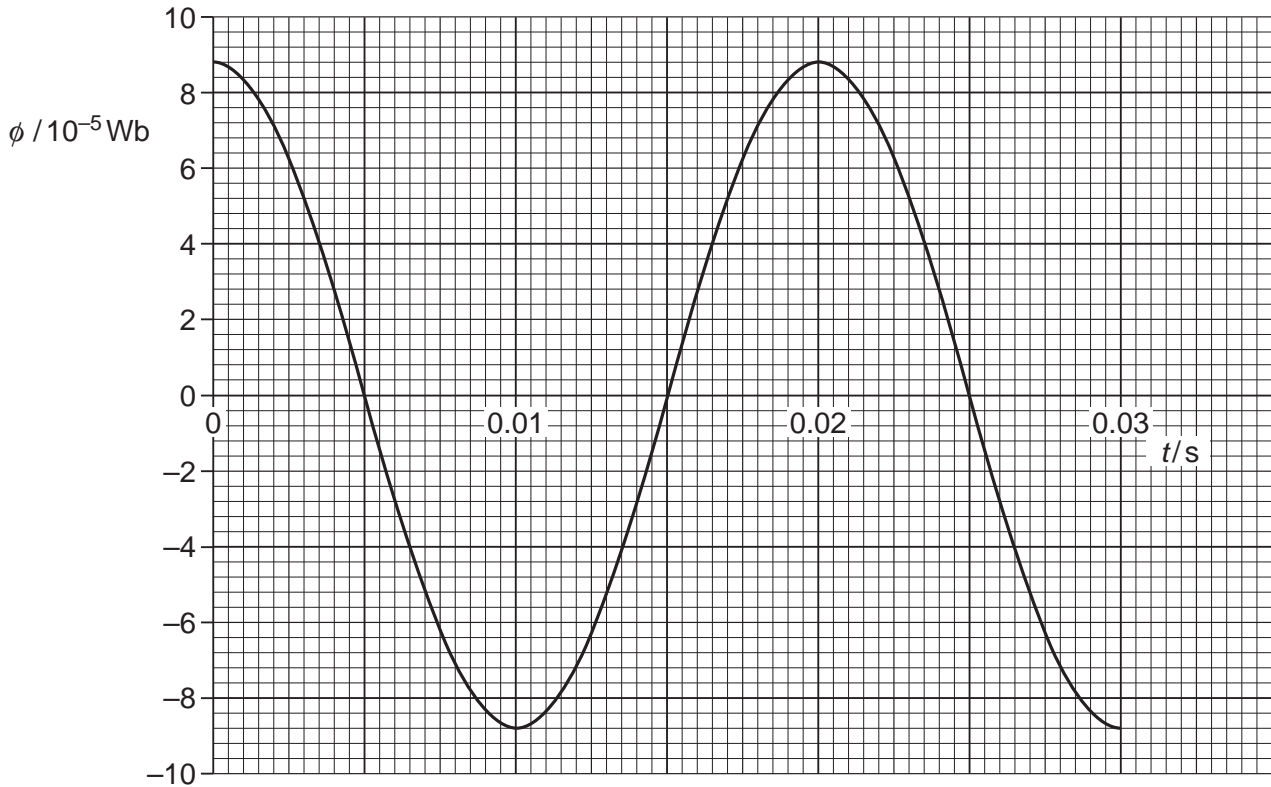


Fig. 4.2

(i) Explain why the magnitude of the magnetic flux through the coil varies as the coil rotates.

.....

.....

.....

..... [2]

(ii) State Faraday's law of electromagnetic induction.

.....  
..... [1]

(iii) Use Fig. 4.2 to describe and explain the variation with time of the induced e.m.f. across the ends of the coil.

.....  
.....  
.....  
.....  
..... [3]

(iv) Use Fig. 4.2 to determine the magnitude of the average induced e.m.f. for the coil between the times 0s and 0.005s.

average e.m.f. = ..... V [2]

(v) State and explain the effect on the magnitude of the maximum induced e.m.f. across the ends of the coil when the coil is rotated at twice the frequency.

.....  
.....  
..... [2]

[Total: 14]



13

6 (a) A sample of a radioactive isotope contains  $4.5 \times 10^{23}$  active undecayed nuclei. The half-life of the isotope is 12 hours. Calculate

(i) the initial activity of the sample

activity = .....  $s^{-1}$  [2]

(ii) the number of active nuclei of the isotope remaining after 36 hours

number = ..... [1]

(iii) the number of active nuclei of the isotope remaining after 50 hours.

number = ..... [2]

(b) Explain why the activity of a radioactive material is a major factor when considering the safety precautions in the disposal of nuclear waste.

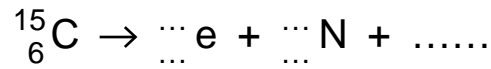
.....  
.....  
.....  
..... [2]

[Total: 7]

7 There are two types of beta decay, beta-plus and beta-minus. An isotope of carbon  $^{15}_6\text{C}$  decays by beta emission into an isotope of nitrogen  $^{15}_7\text{N}$ . An isotope of phosphorus  $^{30}_{15}\text{P}$  decays by beta emission into an isotope of silicon  $^{30}_{14}\text{Si}$ .

(a) Complete the following decay equations for the carbon and phosphorus isotopes.

(i) carbon decay



(ii) phosphorus decay



[3]

(b) State the two beta decays in terms of a quark model of the nucleons.

(i) beta-plus decay

(ii) beta-minus decay

[2]

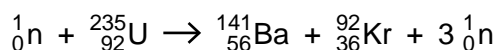
(c) Name the force responsible for beta decay.

..... [1]

[Total: 6]

15

- 8 (a) The following nuclear reaction occurs when a slow-moving neutron is absorbed by an isotope of uranium-235.



- (i) Explain how this reaction is able to produce energy.

.....  
 .....  
 ..... [2]

- (ii) State in what form the energy is released in such a reaction.

..... [1]

- (b) The binding energy per nucleon of each isotope in (a) is given in Fig. 8.1.

isotope	binding energy per nucleon/MeV
${}_{92}^{235}\text{U}$	7.6
${}_{56}^{141}\text{Ba}$	8.3
${}_{36}^{92}\text{Kr}$	8.7

Fig. 8.1

- (i) Explain why the neutron  ${}_0^1n$  does not appear in the table above.

.....  
 ..... [1]

- (ii) Calculate the energy released in the reaction shown in (a).

energy = ..... MeV [2]

[Total: 6]

16

9 A proton travelling at a high velocity is fired at a stationary proton. It stops momentarily at a distance of  $2.0 \times 10^{-15}$  m from the stationary proton.

(a) Calculate the electrostatic force acting on each proton when separated by  $2.0 \times 10^{-15}$  m.

force = ..... N [2]

(b) The two protons fuse together. Explain how the protons are able to remain together.

.....  
..... [1]

(c) Explain why the proton must have a very large velocity for the fusion to occur and the protons to remain together.

.....  
.....  
.....  
..... [2]

[Total: 5]



10 (a) State and describe **one** way in which X-ray photons interact with matter.

.....

.....

.....

..... [2]

(b) The intensity of a collimated beam of X-rays is reduced to 10% of its initial value after passing through 3.0 mm of soft tissue. Calculate the thickness of soft tissue that reduces the intensity to 50% of its initial value.

thickness = ..... mm [3]

(c) X-rays are used to image internal body structures.

(i) Explain how image intensifiers are used to improve the quality of the X-ray image.



*In your answer, you should explain clearly the process involved which makes the image brighter.*

.....

.....

.....

.....

..... [3]

(ii) Explain how contrast media are used to improve the quality of the X-ray image.

.....

.....

.....

..... [2]

[Total: 10]

END OF QUESTION PAPER