



UNIVERSITY OF CAMBRIDGE INTERNATIONAL EXAMINATIONS  
 General Certificate of Education  
 Advanced Subsidiary Level and Advanced Level

CANDIDATE  
 NAME

CENTRE  
 NUMBER

--	--	--	--	--

CANDIDATE  
 NUMBER

--	--	--	--



**PHYSICS**

**9702/22**

Paper 2 AS Structured Questions

**October/November 2012**

**1 hour**

Candidates answer on the Question Paper.

No Additional Materials are required.

**READ THESE INSTRUCTIONS FIRST**

Write your Centre number, candidate number and name on all the work you hand in.

Write in dark blue or black pen.

You may use a soft pencil for any diagrams, graphs or rough working.

Do not use staples, paper clips, highlighters, glue or correction fluid.

**DO NOT WRITE IN ANY BARCODES.**

Answer **all** questions.

You may lose marks if you do not show your working or if you do not use appropriate units.

At the end of the examination, fasten all your work securely together.

The number of marks is given in brackets [ ] at the end of each question or part question.

For Examiner's Use	
<b>1</b>	
<b>2</b>	
<b>3</b>	
<b>4</b>	
<b>5</b>	
<b>6</b>	
<b>7</b>	
<b>Total</b>	

This document consists of **12** printed pages.



**Data**

speed of light in free space,	$c = 3.00 \times 10^8 \text{ m s}^{-1}$
permeability of free space,	$\mu_0 = 4\pi \times 10^{-7} \text{ H m}^{-1}$
permittivity of free space,	$\epsilon_0 = 8.85 \times 10^{-12} \text{ F m}^{-1}$
	$(\frac{1}{4\pi\epsilon_0} = 8.99 \times 10^9 \text{ m F}^{-1})$
elementary charge,	$e = 1.60 \times 10^{-19} \text{ C}$
the Planck constant,	$h = 6.63 \times 10^{-34} \text{ J s}$
unified atomic mass constant,	$u = 1.66 \times 10^{-27} \text{ kg}$
rest mass of electron,	$m_e = 9.11 \times 10^{-31} \text{ kg}$
rest mass of proton,	$m_p = 1.67 \times 10^{-27} \text{ kg}$
molar gas constant,	$R = 8.31 \text{ J K}^{-1} \text{ mol}^{-1}$
the Avogadro constant,	$N_A = 6.02 \times 10^{23} \text{ mol}^{-1}$
the Boltzmann constant,	$k = 1.38 \times 10^{-23} \text{ J K}^{-1}$
gravitational constant,	$G = 6.67 \times 10^{-11} \text{ N m}^2 \text{ kg}^{-2}$
acceleration of free fall,	$g = 9.81 \text{ m s}^{-2}$

**Formulae**

uniformly accelerated motion,

$$s = ut + \frac{1}{2}at^2$$

$$v^2 = u^2 + 2as$$

work done on/by a gas,

$$W = p\Delta V$$

gravitational potential,

$$\phi = -\frac{Gm}{r}$$

hydrostatic pressure,

$$p = \rho gh$$

pressure of an ideal gas,

$$p = \frac{1}{3} \frac{Nm}{V} \langle c^2 \rangle$$

simple harmonic motion,

$$a = -\omega^2 x$$

velocity of particle in s.h.m.,

$$v = v_0 \cos \omega t$$

$$v = \pm \omega \sqrt{(x_0^2 - x^2)}$$

electric potential,

$$V = \frac{Q}{4\pi\epsilon_0 r}$$

capacitors in series,

$$1/C = 1/C_1 + 1/C_2 + \dots$$

capacitors in parallel,

$$C = C_1 + C_2 + \dots$$

energy of charged capacitor,

$$W = \frac{1}{2} QV$$

resistors in series,

$$R = R_1 + R_2 + \dots$$

resistors in parallel,

$$1/R = 1/R_1 + 1/R_2 + \dots$$

alternating current/voltage,

$$x = x_0 \sin \omega t$$

radioactive decay,

$$x = x_0 \exp(-\lambda t)$$

decay constant,

$$\lambda = \frac{0.693}{t_{\frac{1}{2}}}$$

Answer **all** the questions in the spaces provided.

For  
Examiner's  
Use

- 1 (a) The drag force  $D$  on an object of cross-sectional area  $A$ , moving with a speed  $v$  through a fluid of density  $\rho$ , is given by

$$D = \frac{1}{2} C \rho A v^2$$

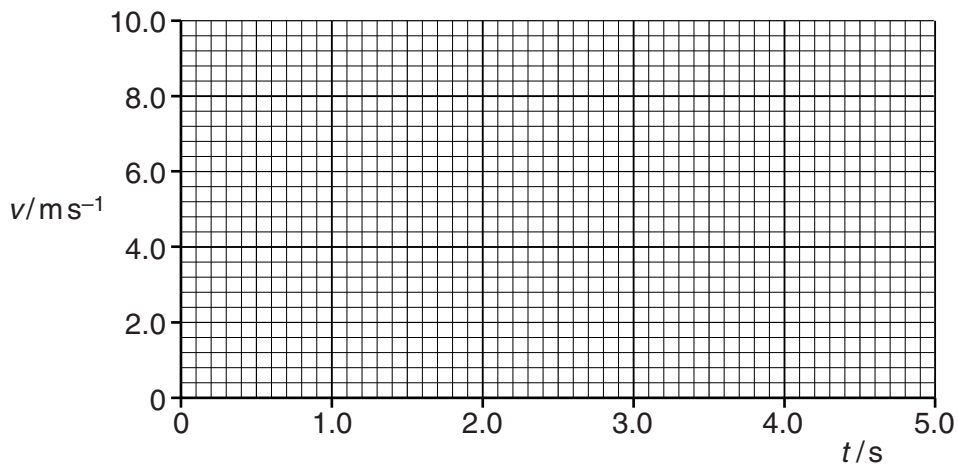
where  $C$  is a constant.

Show that  $C$  has no unit.

[2]

- (b) A raindrop falls vertically from rest. Assume that air resistance is negligible.

- (i) On Fig. 1.1, sketch a graph to show the variation with time  $t$  of the velocity  $v$  of the raindrop for the first 1.0 s of the motion.



**Fig. 1.1**

[1]

- (ii) Calculate the velocity of the raindrop after falling 1000 m.

velocity = .....  $\text{ms}^{-1}$  [2]

(c) In practice, air resistance on raindrops is not negligible because there is a drag force. This drag force is given by the expression in (a).

For  
Examiner's  
Use

(i) State an equation relating the forces acting on the raindrop when it is falling at terminal velocity.

[1]

(ii) The raindrop has mass  $1.4 \times 10^{-5} \text{ kg}$  and cross-sectional area  $7.1 \times 10^{-6} \text{ m}^2$ . The density of the air is  $1.2 \text{ kg m}^{-3}$  and the initial velocity of the raindrop is zero. The value of  $C$  is 0.60.

1. Show that the terminal velocity of the raindrop is about  $7 \text{ m s}^{-1}$ .

[2]

2. The raindrop reaches terminal velocity after falling approximately 10 m. On Fig. 1.1, sketch the variation with time  $t$  of velocity  $v$  for the raindrop. The sketch should include the first 5 s of the motion.

[2]

2 (a) State Newton's second law.

.....  
..... [1]

(b) A ball of mass 65 g hits a wall with a velocity of  $5.2 \text{ ms}^{-1}$  perpendicular to the wall. The ball rebounds perpendicularly from the wall with a speed of  $3.7 \text{ ms}^{-1}$ . The contact time of the ball with the wall is 7.5 ms.

Calculate, for the ball hitting the wall,

(i) the change in momentum,

change in momentum = ..... N s [2]

(ii) the magnitude of the average force.

force = ..... N [1]

(c) (i) For the collision in (b) between the ball and the wall, state how the following apply:

1. Newton's third law,

.....  
.....  
..... [2]

2. the law of conservation of momentum.

.....  
..... [1]

(ii) State, with a reason, whether the collision is elastic or inelastic.

.....  
..... [1]

- 3 (a) With reference to the arrangement of atoms, distinguish between metals, polymers and amorphous solids.

For  
Examiner's  
Use

metals: .....

.....

polymers: .....

.....

amorphous solids: .....

.....

[3]

- (b) On Fig. 3.1, sketch the variation with extension  $x$  of force  $F$  to distinguish between a metal and a polymer.

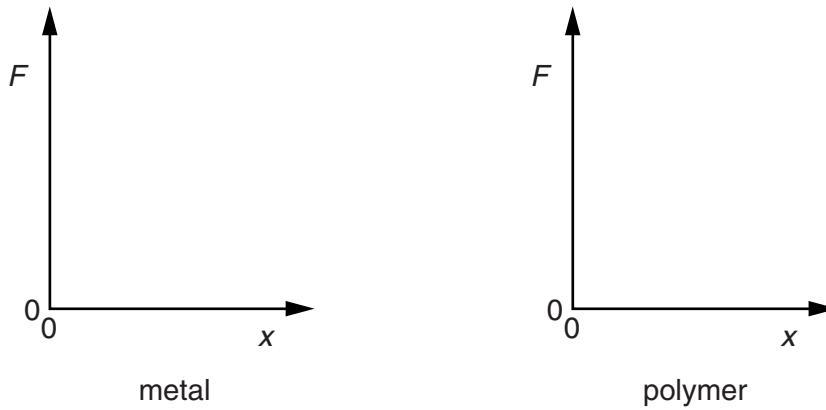


Fig. 3.1

[2]

- 4 Fig. 4.1 shows an arrangement for producing stationary waves in a tube that is closed at one end.

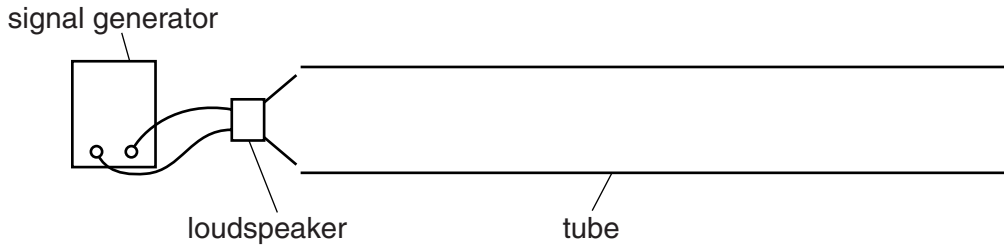


Fig. 4.1

- (a) Explain how waves from the loudspeaker produce stationary waves in the tube.

.....

.....

.....

.....

..... [3]

- (b) One of the stationary waves that may be formed in the tube is represented in Fig. 4.2.

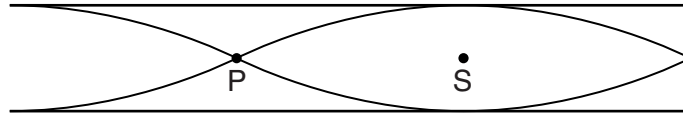


Fig. 4.2

- (i) Describe the motion of the air particles in the tube at

1. point P,

..... [1]

2. point S.

..... [1]

- (ii) The speed of sound in the tube is  $330 \text{ m s}^{-1}$  and the frequency of the waves from the loudspeaker is  $880 \text{ Hz}$ . Calculate the length of the tube.

length = ..... m [3]



- 5 Fig. 5.1 shows a 12V power supply with negligible internal resistance connected to a uniform metal wire AB. The wire has length 1.00m and resistance  $10\ \Omega$ . Two resistors of resistance  $4.0\ \Omega$  and  $2.0\ \Omega$  are connected in series across the wire.

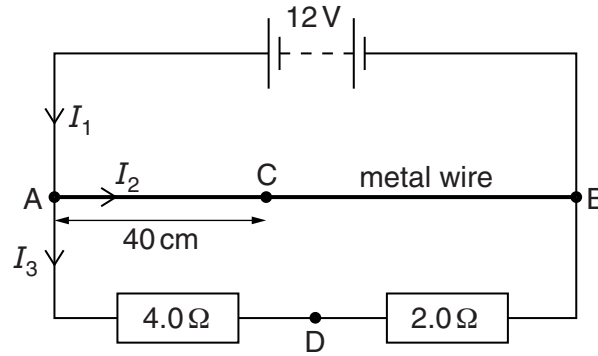


Fig. 5.1

Currents  $I_1$ ,  $I_2$  and  $I_3$  in the circuit are as shown in Fig. 5.1.

- (a) (i) Use Kirchoff's first law to state a relationship between  $I_1$ ,  $I_2$  and  $I_3$ .

..... [1]

- (ii) Calculate  $I_1$ .

$I_1 = \dots\dots\dots$  A [3]

- (iii) Calculate the ratio  $x$ , where

$$x = \frac{\text{power in metal wire}}{\text{power in series resistors}}.$$

$x = \dots\dots\dots$  [3]

- (b) Calculate the potential difference (p.d.) between the points C and D, as shown in Fig. 5.1. The distance AC is 40cm and D is the point between the two series resistors.

p.d. =  $\dots\dots\dots$  V [3]

6 (a) State Hooke's law.

.....  
 ..... [1]

(b) A spring is attached to a support and hangs vertically, as shown in Fig. 6.1. An object M of mass 0.41 kg is attached to the lower end of the spring. The spring extends until M is at rest at R.

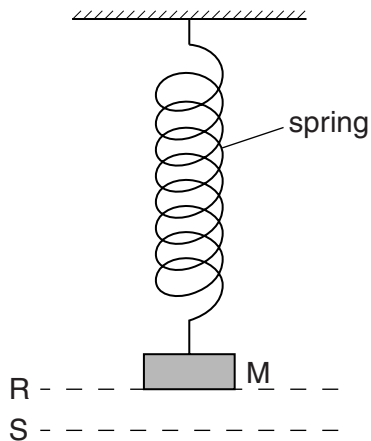


Fig. 6.1

The spring constant of the spring is  $25 \text{ N m}^{-1}$ . Show that the extension of the spring is about 0.16 m.

[2]

(c) The object M in Fig. 6.1 is pulled down a further 0.060 m to S and is then released. For M, just as it is released,

(i) state the forces acting on M,

..... [1]

(ii) calculate the acceleration of M.

acceleration = .....  $\text{m s}^{-2}$  [3]

(d) Describe and explain the energy changes from the time the object M in Fig. 6.1 is released to the time it first returns to R.

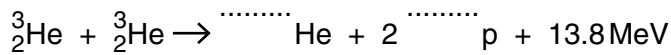
*For  
Examiner's  
Use*

.....  
.....  
.....  
..... [2]

**Please turn over for Question 7.**

7 A nuclear reaction between two helium nuclei produces a second isotope of helium, two protons and 13.8 MeV of energy. The reaction is represented by the following equation.

For  
Examiner's  
Use



(a) Complete the nuclear equation. [2]

(b) By reference to this reaction, explain the meaning of the term *isotope*.

.....  
 .....  
 ..... [2]

(c) State the quantities that are conserved in this nuclear reaction.

.....  
 .....  
 .....  
 ..... [2]

(d) Radiation is produced in this nuclear reaction.

State

(i) a possible type of radiation that may be produced,  
 ..... [1]

(ii) why the energy of this radiation is less than the 13.8 MeV given in the equation.  
 ..... [1]

(e) Calculate the minimum number of these reactions needed per second to produce power of 60W.

number = ..... s<sup>-1</sup> [2]

Permission to reproduce items where third-party owned material protected by copyright is included has been sought and cleared where possible. Every reasonable effort has been made by the publisher (UCLES) to trace copyright holders, but if any items requiring clearance have unwittingly been included, the publisher will be pleased to make amends at the earliest possible opportunity.

University of Cambridge International Examinations is part of the Cambridge Assessment Group. Cambridge Assessment is the brand name of University of Cambridge Local Examinations Syndicate (UCLES), which is itself a department of the University of Cambridge.